

**Exercice 1**

Compléter :

▶1.  $\frac{9\ 380}{1\ 000} = \dots$

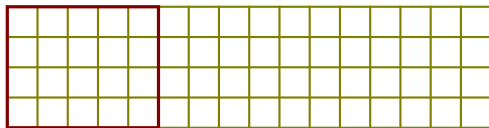
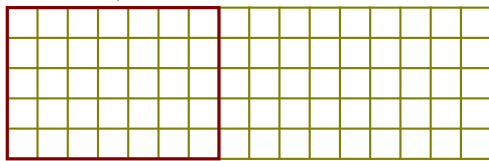
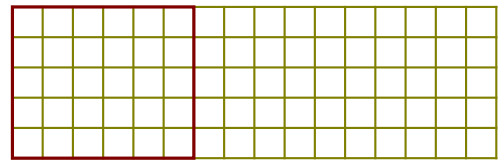
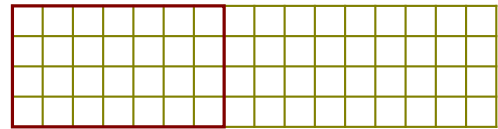
▶2.  $\frac{60\ 560}{100} = \dots$

▶3.  $\frac{\dots}{1\ 000} = 14,64$

▶4.  $\frac{\dots}{100} = 19,16$

▶5.  $\frac{54\ 580}{\dots} = 54,58$

▶6.  $\frac{7\ 262}{100} = \dots$

**Exercice 2**▶1. Colorer  $\frac{7}{5}$  de ce rectangle.▶2. Colorer  $\frac{6}{7}$  de ce rectangle.▶3. Colorer  $\frac{15}{15}$  de ce rectangle.▶4. Colorer  $\frac{7}{14}$  de ce rectangle.**Exercice 3**

▶1. Compléter :

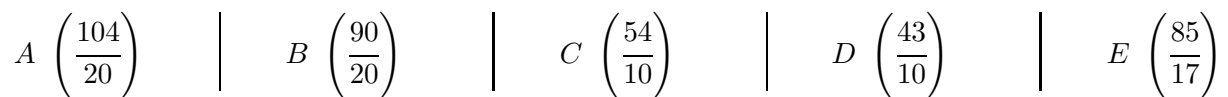
a) 1 unité = ... vingtièmes

b) 1 unité = ... dixièmes

c) 3 unités = ... vingtièmes

d) 3 unités = ... dixièmes

▶2. Sur la demi-droite ci-dessous, placer les points d'abscisse donnée :



▶3. Compléter les abscisses des points suivants :

a)  $F \left( \frac{\dots}{20} \right)$

b)  $F \left( \frac{\dots}{10} \right)$

c)  $G \left( \frac{\dots}{20} \right)$

d)  $G \left( \frac{\dots}{10} \right)$

**Exercice 4**

Compléter :

▶1.  $\frac{90\ 190}{100} = \dots$

▶2.  $\frac{3\ 860}{\dots} = 38,6$

▶3.  $\frac{53\ 740}{\dots} = 537,4$

▶4.  $\frac{6\ 162}{\dots} = 6,162$

▶5.  $\frac{17\ 790}{\dots} = 177,9$

▶6.  $\frac{73\ 690}{100} = \dots$